



**INDIAN SCHOOL MUSCAT
PRIMARY SECTION
ANNUAL EXAMINATION
2019-2020
SCIENCE**



GRADE III

SET A

TOTAL MARKS -30

A) Multiple Choice Questions.

(6 x ½ = 3)

1.	Which of these is formed when path of the light is blocked? a) Reflection b) Energy c) Shadow
2.	Constellations are a) group of stars b) group of planets c) group of meteors
3.	Sandy soil can be found a) in mountains b) in forests c) near beaches
4.	The Earth's nearest neighbour in space is the a) Sun b) Moon c) Saturn
5.	Which of these is the softest rock ? a) Diamond b) Chalk c) Coal
6.	A toy car gets energy from a) tyres b) batteries c) petrol

B) Match the following.

(3 x 1 = 3)

Column A	Column B
1) Moon	a) is not very hard.
2) Coal	b) is a plant.
3) Jute	c) is a natural satellite.

1. _____ 2. _____ 3. _____

C) Give one word answer for the following.**(6 x 1 = 6)**

1.	We need this to move things. _____.
2.	A regular arrangement of lines, shapes and colours _____.
3.	Rocks are made up of small grains called _____.
4.	Bouncing of light _____.
5.	The Moon takes 28 days to go around the _____.
6.	A mixture of sand and clay is called _____.

D) Define the following terms.**(4 x 1 = 4)**

1.	Vibration
2.	Satellite
3.	Humus
4.	Force

E) Answer the following.**(6 x 1 = 6)**

1.	How many planets are there in our solar system ?
2.	What are Natural Resources ?
3.	How do we get metals ? Name three metals.
4.	Where does the Moon get its light from ?
5.	Name three products that we get from petroleum.
6.	What is work ?

F) Give reason.**(4 x 1 = 4)**

1.	Your school uniform cannot be made with paper.
2.	We see stars only at night.
3.	Granite cannot be used for writing on the black board.
4.	It is not advisable to live near an airport.

G) Look at the picture and answer the following questions.

(4 x 1 = 4)

1. a) Identify the picture .



b) Give two examples of the materials made from it.

2. What are earthen pots made up of ?



3. Where does a car get energy to move from?



4. Why is an aquarium tank made of glass?





**INDIAN SCHOOL MUSCAT
PRIMARY SECTION
ANNUAL EXAMINATION
2019-2020
SCIENCE**



GRADE III

SET B

TOTAL MARKS -30

A) Multiple Choice Questions.

(6 x ½ = 3)

1.	The patterns formed by stars are called a) Solar system b) Constellations c) Planets
2.	Sunlight can pass through a) glass b) book c) wall
3.	Sandy soil can be found a) in mountains b) in forests c) near beaches
4.	The only planet that has life on it is a) Mercury b) Earth c) Saturn
5.	Earthen pots are made from a) Sandy soil b) Loam soil c) Clayey soil
6.	Our body gets energy from a) food b) petrol c) batteries

B) Match the following.

(3 x 1 = 3)

Column A	Column B
1) Sandy soil	a) Petroleum
2) Plastic	b) Constellation
3) The Great Bear	c) cannot hold water

1. _____ 2. _____ 3. _____

C) Give one word answer.

(6 x 1 = 6)

1.	Natural satellite of the earth _____
2.	Rotten plants and animals are called _____
3.	Push or pull which moves things. _____
4.	The Sun is the closest star to the _____
5.	It is formed when the path of light is blocked. _____
6.	Type of rock used as a fuel. _____

D) Define the following terms.

(4 x 1 = 4)

1.	Reflection
2.	Star
3.	Minerals
4.	Vibration

E)Answer the following.

(6 x 1 = 6)

1.	Why should we not use too many things made of plastics ?
2.	Why do you see the full moon ?
3.	Rubber can be stretched. Is it a solid or liquid ?
4.	How many planets are there in our solar system ?
5.	Write three examples for unpleasant sounds.
6.	What is used to make linen ?

F) Give reason.

(4 x 1 = 4)

1.	Rubber is not usually used to make chairs and tables..
2.	We cannot see the moon on a new moon day.
3.	Teachers use chalk to write on the blackboard.
4.	An aquarium tank is made of glass.

G) Look at the picture and answer the following questions.

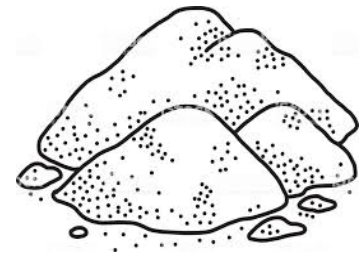
(4 x 1 = 4)

1.a) Identify the materials used to make the given object.


b) Where do we get this material from?



2) Why do a few plants grow in sandy soil ?



3) From where does a toy car get energy to move?



4) Why is it not advisable to live near an airport ?





INDIAN SCHOOL MUSCAT
PRIMARY SECTION
ANNUAL EXAMINATION
2019-2020
SCIENCE



GRADE III

SET E

TOTAL MARKS -30

A) Multiple Choice Questions.

(6 x ½ = 3)

1.	The Taj Mahal is made up of a) Cement b) Granite c) White marble
2.	What are diamonds made of? a) Glass b) Carbon c) Silver
3.	Identify the biggest planet. a) Earth b) Jupiter c) Venus
4.	_____ gives out its own light. a) Sun b) Moon c) Earth
5.	Which sound can cause damage to your ears? a) Chirping of a bird b) Sound of a flute c) Bursting of firecrackers
6.	Which planet is considered to be Earth's Twin? a) Mars b) Venus c) Neptune

B) Match the following.

(3 x 1 = 3)

Column A	Column B
1.Chalk	a) Constellation
2.Petroleum	b) Soft rock
3.Orion	c) Star
	d) Wax

C) Give one word.**(6 x 1 = 6)**

1.	Soil that can hold air but cannot hold water.
2.	Type of rock that is used as fuel.
3.	Earth's natural satellite.
4.	The Sun, the eight planets and their moons together.
5.	Source of energy for cars.
6.	Bouncing of light.

D) Define the following terms.**(4 x 1 = 4)**

1.	Humus
2.	Constellation
3.	Vibration
4.	Force

E) Answer the following.**(6 x 1 = 6)**

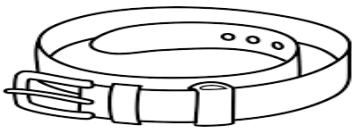
1.	How many days does the Moon take to go around the Earth?
2.	Why do you see the full moon ?
3.	Where do we get Petroleum from?
4.	Why do we need energy?
5.	Name three things that we get from plants and animals.
6.	Why should we not use too many things made of plastic?

F) Give reason.**(4 x 1 = 4)**

1.	We don't see many plants near the seashore.
2.	We cannot make clothes with paper.
3.	We see stars only at night.
4.	We can see our own face in a mirror.

G) Look at the picture and answer the following questions.

(4 x 1 = 4)



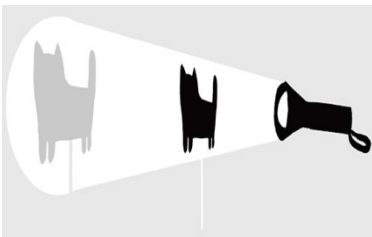
1. i) Identify the material used.

ii) Where do we get this material from?



2. i) Write the name of the soil.

ii) This soil is used to make pots but not to grow plants. Why?



3. i) What is formed on the wall ?

ii) Why is it formed?



4. i) Do books give out light?

ii) What will happen when light falls on the book?



INDIAN SCHOOL MUSCAT
PRIMARY SECTION
ANNUAL EXAMINATION
2019-2020
SCIENCE



GRADE III

SET F

TOTAL MARKS -30

A) Multiple Choice Questions.

(6 x ½ = 3)

1.	Earthen pots are made from _____. a) Sandy soil b) Humus c) Clayey soil
2.	Which of these do not live in soil? a) Earthworms b) Snakes c) Ostrich
3.	Which of the following is considered as Earth's Twin? a) Mars b) Venus c) Neptune
4.	Which constellation looks like a hunter? a) The Great Bear b) Orion c) Caris Major
5.	Which of these is not a source of light? a) Moon b) Sun c) Candle
6.	Which sound is pleasant to your ears? a) Sound from loudspeaker b) Sound from a guitar c) Bursting fire crackers

B) Match the following.

(3 x 1 = 3)

Column A	Column B
1. Sticky Soil	a) Day 14
2. Full Moon	b) Rubber
3. Tyres	c) Metal
	d) Clay

C) Give one word.**(6 x 1 = 6)**

1.	Type of rock that is used as fuel.
2.	Mixture of sand and clay.
3.	The sun, eight planets and their moons together.
4.	Ball of rock that revolves around the earth.
5.	Our body gets energy from this.
6.	Source of energy for the car .

D) Define the following terms.**(4 x 1 = 4)**

1.	Satellite
2.	Minerals
3.	Reflection
4.	Force

E) Answer the following.**(6 x 1 = 6)**

1.	Why can't we make clothes with paper?
2.	Why should we not use too many things made of plastic?
3.	Why can we not see the moon on a new moon day?
4.	How many days does the Moon take to go around the Earth?
5.	How are shadows formed?
6.	Where do we get petroleum from ?

F) Give reason.**(4 x 1 = 4)**

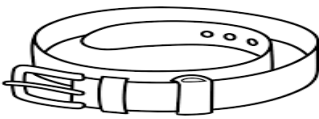
1.	Planets are revolving around the sun all the time but they don't crash into the sun or spin off into space.
2.	Rubber is not usually used to make chairs and tables.
3.	Granite cannot be used for writing on the black board.
4.	We should not listen to very loud music.

G) Look at the picture and answer the following questions.


(4 x 1 = 4)



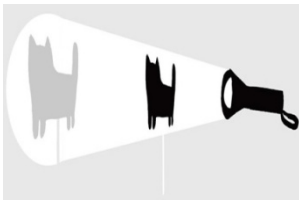
1. i) Name the type of soil.
- ii) This soil is used to make pots but not to grow plants. Why?



2. i) Identify the material used.
- ii) Where do we get this material from?



3. i) What is the material used to make an aquarium?
- ii) Why is this material used ?



4. i) What is formed on the wall ?
- ii) Why is it formed?