



INDIAN SCHOOL MUSCAT
PRIMARY SECTION
ANNUAL EXAMINATION



MATHS
SET D

GRADE III

TOTAL MARKS - 20

I. Choose the correct answer.

(4)

1. 13 kg = _____.

a. 13000 gram	b. 1300 gram	c. 130 gram
---------------	--------------	-------------

2. I have one flat face , one curved face, one corner and one curved edge. Who am I ? _____.

a. cone	b. cylinder	c. sphere
---------	-------------	-----------

3. To convert millilitres to litres, we _____.

a. multiply by 1000	b. divide by 1000	c. divide by 100
---------------------	-------------------	------------------

4. A solid shape that looks like a globe.

a. circle	b. sphere	c. cone
-----------	-----------	---------

5. 15000 g = _____ .

a. 150 kg	b. 1500 kg	c. 15 kg
-----------	------------	----------

6. 15 , 12 , 9 , _____.

a. 6	b. 3	c. 13
------	------	-------

7. It has no length , breadth or thickness.

a. line segment	b. line	c. point
-----------------	---------	----------

8. 14 litres = _____

a. 14000 ml	b. 1400 ml	c. 140 ml
-------------	------------	-----------

II. Do as Directed.

(6)






1. Observe the given shape and answer the questions given below.

a. Identify the shape	
b. No. of edges	
c. No. of corners	
d. No. of faces	



2. Draw a line segment measuring 8cms.

3. The number of class 3 children playing different sports is shown below. Look at the pictograph and answer the questions given below.

Football	
Table Tennis	
Badminton	
Cricket	
Athletics	

- Which sport is the least popular among children?
- Which two sports are equally popular among the children ?
- Which sport is the most popular among the children?



IV