

**INDIAN SCHOOL MUSCAT
PRIMARY SECTION**

TERM I	Periodic Test I	NAME:	ROLL NO.
SUBJECT: SOCIAL STUDIES	SET C	STD IV:	DATE:
TEACHER'S SIGNATURE:	PARENT'S SIGNATURE:		

/20

I. Name the following.

1 x 5 = 5

1) A volcanic mountain

2) World's longest river

3) The highest mountain range

4) The biggest desert

5) World's largest island

II. Answer the following:

2x 2= 4

1) Define a peninsula?

2) What are landforms?

III. Differentiate between Perennial rivers and Non- Perennial rivers.

2

Perennial rivers	Non-Perennial rivers
1.	1.
2.	2.

IV. Give Reasons.

2

1) Plains are thickly populated areas in the world.

VI. Choose the correct option.

$\frac{1}{2} \times 4 = 2$

1) A land mass surrounded by water on all sides.

island	plateau	valley
--------	---------	--------

2) A flat land with gentle slopes.

delta	plains	coast
-------	--------	-------

3) The tip of a peninsula.


island	valley	cape
--------	--------	------

4) A long stream of water that ultimately flows into the sea.


river	bay	delta
-------	-----	-------

VI. Identify the given landforms.

2



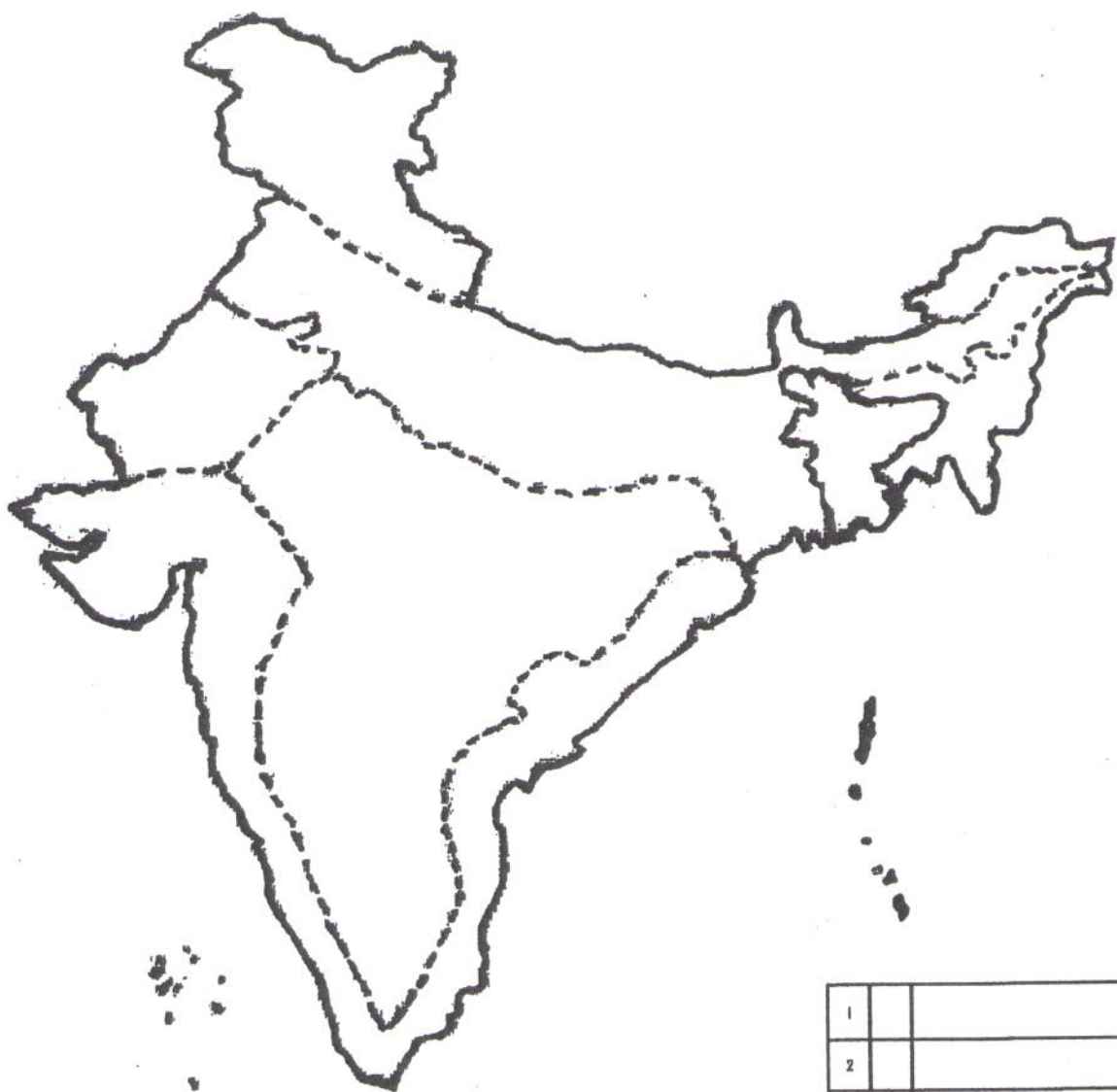
1. A lowland between hills or mountains .



2. Large extremely dry areas of land .

VII. Colour and mark the following landforms in the given map of India. 3 Marks

- a) Desert - yellow b) Plateau - orange c) Plains - green



1		
2		
3		