

**INDIAN SCHOOL MUSCAT
PRIMARY SECTION**

TERM I	Periodic Test 1	NAME:	ROLL NO.
Subject : Social Studies	SET A	STD IV:	DATE :
TEACHER'S SIGNATURE:		PARENT'S SIGNATURE:	

/20

I. Name the following.

1 x 5 = 5

- 1) a seasonal river
- 2) highest mountain peak
- 3) longest river in the world
- 4) world's largest island
- 5) pass connecting Pakistan and Afghanistan

II. Answer the following.

2 x 2 = 4

- 1) What is a Desert?

- 2) How are valleys formed?

III. Differentiate between a Mountain and Plateau.

2 x 1 = 2

Mountain	Plateau
1.	1.
2.	2.

IV. Give Reasons

2 x 1 = 2

1) Most of the civilizations developed along the rivers.

V. Choose the correct option.

1/2 x 4 = 2

1) A long stream of water that flows into the sea.

bay	river	gulf
-----	-------	------

2) Roof of the world.

Tibetan Plateau	Deccan Plateau	Colorado Plateau
-----------------	----------------	------------------

3) Narrow natural gaps between the mountains.


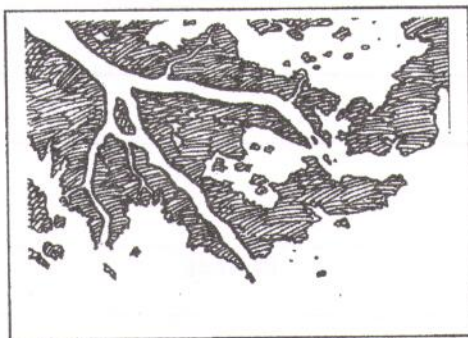
valley	deltas	passes
--------	--------	--------

4) Heavily populated landforms.

valley	plains	plateaus
--------	--------	----------

IV. Identify the given landforms .

2 x 1 = 2

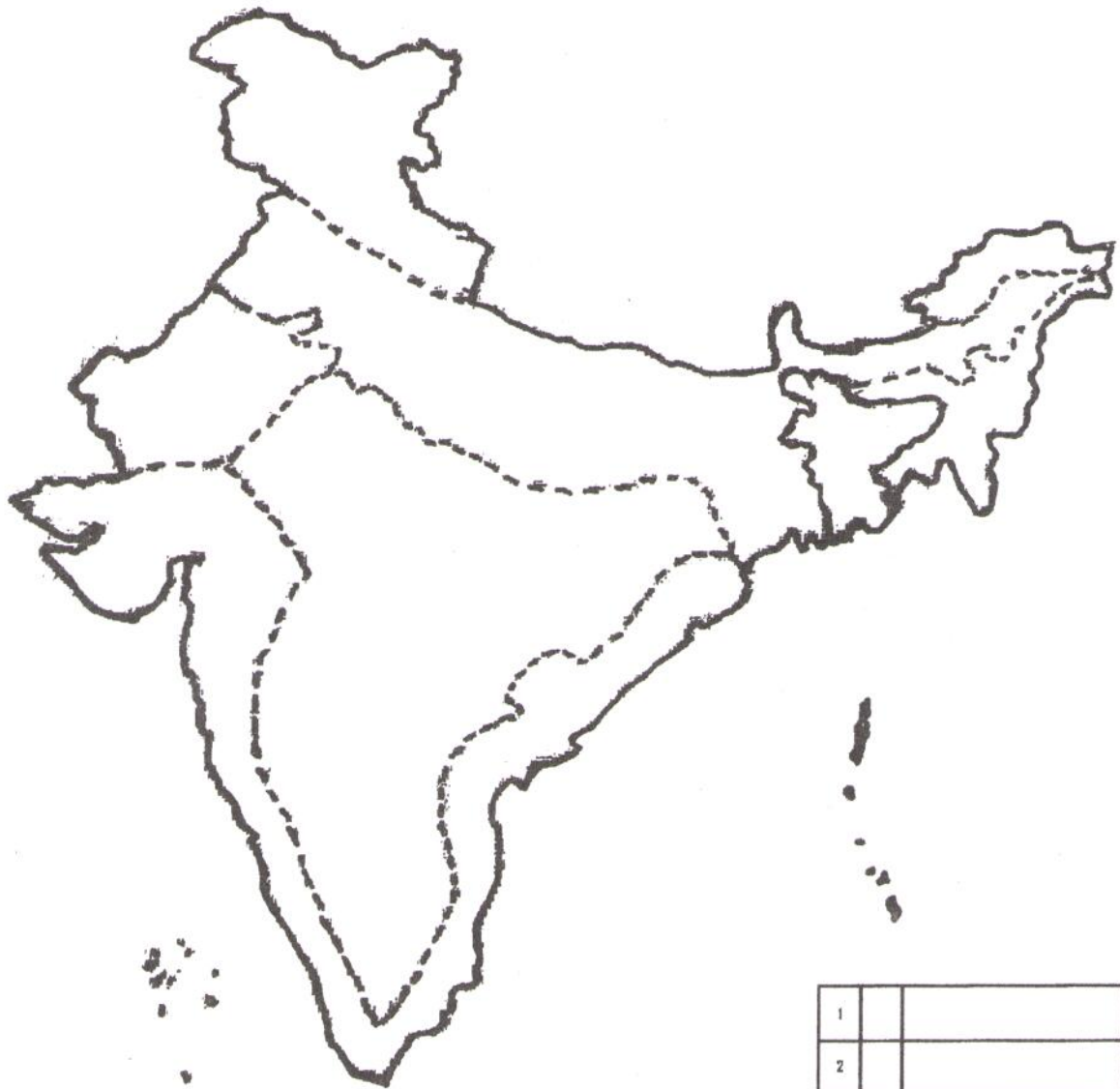


1. A triangle-shaped landform formed where a river flows into the sea. _____

2. A large area of land higher than the surrounding with flat surface. _____

VII. Colour and mark the following landforms in the given map of India. 3 Marks

- a) Mountains - brown b) Plateau - orange c) Plains - green



1		
2		
3		