

**INDIAN SCHOOL MUSCAT
PRIMARY SECTION
PERIODIC TEST I**

SUBJECT: SCIENCE	NAME:
SET A	STD: III SEC: ROLL NO:
TEACHER'S SIGNATURE	DATE: ___ / ___ /18

Marks

20

I. Choose the correct option.

(4 marks)

1. Which plant is a climber?

sugarcane	rose	money plant
-----------	------	-------------

2. Which of these do not breathe?

stone	mosquito	plant
-------	----------	-------

3. Fish breathe through this organ.

kidneys	nose	gills
---------	------	-------

4. This fruit has several seeds inside them.

pomegranate	litchi	mango
-------------	--------	-------

II. Name the following.

(4 marks)

- a. The type of root seen in a mustard plant _____
- b. This plant catches and eats insects _____
- c. The process of producing young ones _____
- d. The substance that make the leaves look green _____

III. State True or False .

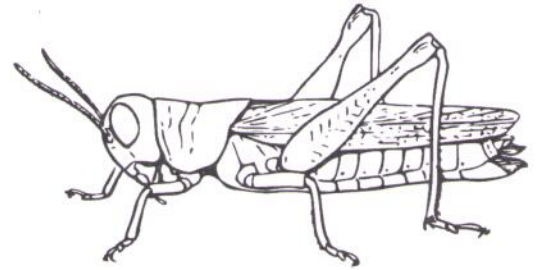
(2 marks)

1. Plants like banana have thick , soft green stems. _____
2. Cows reproduce by laying eggs. _____

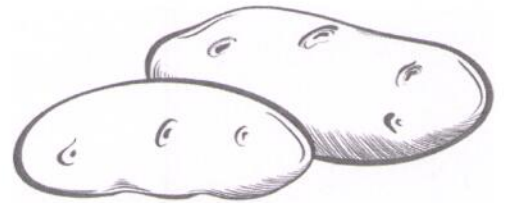
IV. Look at the diagram and fill in the blanks.

(4 marks)

1.
 - a. Identify the picture _____
 - b. They breathe through their _____

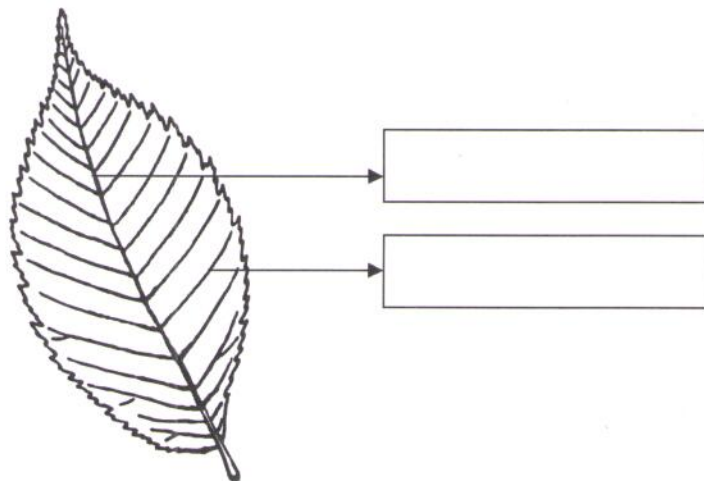


2.
 - a. Identify the picture _____



- b. This plant stores its extra food in _____

3.



The main function of the leaf is _____

V. Answer the following questions.

(4 marks)

1. Differentiate between Living and Non living things.(Any two points)

Living things	Non living things
1.	1.
2.	2.

2. Write down any two things that the stem does for the plant.

VI. Give reason.

(1 mark)

1. Plants like mushroom cannot make its own food.

VII. Life Skills.

(1 mark)

Tinu has a potted plant in her garden .Tick the correct options to be followed so that her plant grows well.

- a. She must water the plant everyday.
- b. Check that plant gets proper sunlight.
- c. She must not water the plants .
- d. She must keep the plant away from air and sunlight.