



INDIAN SCHOOL MUSCAT
PRIMARY SECTION
ANNUAL EXAMINATION
MATHS
SEN PAPER



GRADE III

TOTAL MARKS - 20

I. Choose the correct answer.

(10)

1. 1 kilogram is equal to _____.

a. 100 g	b. 1000 g	c. 10 g
----------	-----------	---------

2. The weight of your school bag is measured in _____.

a. litre	b. gram	c. kilogram
----------	---------	-------------

3. 1000 ml is equal to _____.

a. 1 litre	b. 10 litres	c. 100 litres
------------	--------------	---------------

4. Which of these has no length, breadth or thickness? _____.

a. ray	b. point	c. line
--------	----------	---------

5. A dice is shaped like a _____.

a. cube	b. sphere	c. cuboid
---------	-----------	-----------

6. Write the next number in this pattern 10,20, 30, _____.

a. 50	b. 40	c. 60
-------	-------	-------

7. A _____ has a beginning and an end.

a. ray	b. line segment	c. line
--------	-----------------	---------

8. Write the next alphabet in this pattern L, M,N, _____.

a. P	b. Q	c. O
------	------	------

9. 8 litres = _____.

a. 800 ml	b. 8000 ml	c. 80 ml
-----------	------------	----------



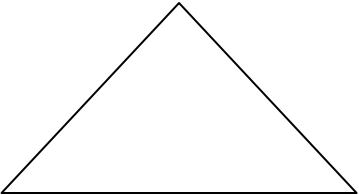

10. 6000 g = _____.

a. 60 kg	b. 6 kg	c. 6000 kg
----------	---------	------------

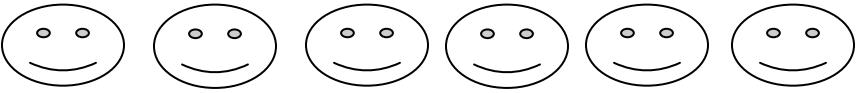




II. Do as Directed.

(4)

1. Identify the shapes given below.

1) 	
2) 	
3) 	
4) 	

2. Rahul got smiley face for various subjects. Look at the pictograph and answer the questions given below. (2)

Maths	
Science	
Social Studies	
Hindi	
English	

a. How many smiley faces did Rahul get in Maths ?

b. In which subjects did Rahul three smiley faces ? (Hindi / Science)

III. Solve the following. (2)

1. Add 5 kg and 4 kg

2. Subtract 7 l and 5 l

IV. Solve the given word problem and tick the correct answer. (2)

1. In a provision shop there were 9 kg of sugar in the morning. At the end of the day 5 kg of sugar were left .How much sugar was sold during the day ?

a) 4 kg	b) 3kg	c) 5 kg
---------	--------	---------